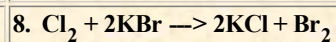
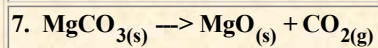
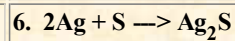
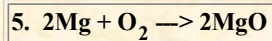
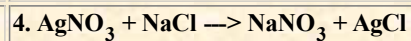
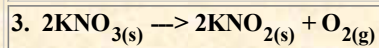
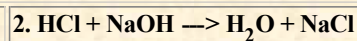



Science Help Online Worksheet 8-2a Classification of Chemical Reactions

Name _____

Section _____

Identify the following chemical equations by type.



Please forward all questions, comments and criticisms to [Gregory L. Curran](#).

© Copyright 2004 Fordham Preparatory School, All Rights Reserved.

Last Modified March 18, 2004